

8 times table

Name: _____

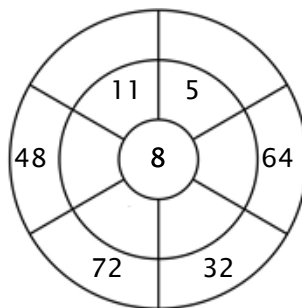
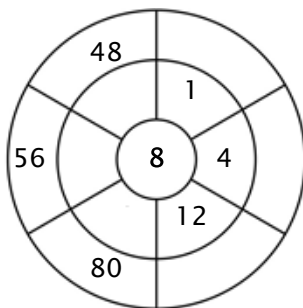
Exercise 1:

Color in all of the boxes that are the solutions of this time table.

95	32	16	55	48
33	8	64	72	1
7	22	48	64	23
80	56	80	24	96
88	45	96	24	21

Exercise 2:

Complete the circle by multiplying the number in the center by the middle ring to get the outer numbers.



Exercise 3:

Fill in the correct product.

a) $9 \times 8 =$ _____

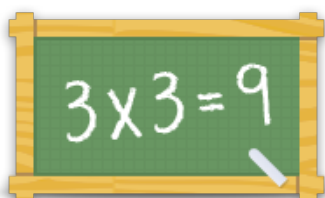
b) $10 \times 8 =$ _____

c) $7 \times 8 =$ _____

d) $3 \times 8 =$ _____

e) $1 \times 8 =$ _____

f) $2 \times 8 =$ _____



For more worksheets, games and exercises:
www.timestables.co.uk