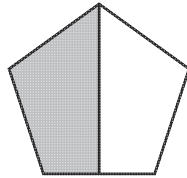
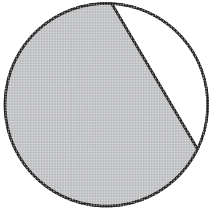
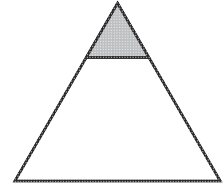
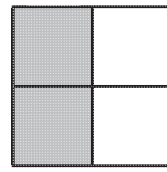
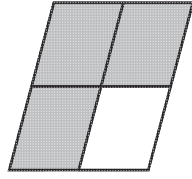



Is It Half?

Can you sort these shapes into the correct column?



$\frac{1}{2}$	Not $\frac{1}{2}$

Is It Half?

Can you sort these shapes into the correct column?

$\frac{1}{2}$	Not $\frac{1}{2}$
