


Compass Directions

I can use the eight compass points to describe routes on a map.



1. From the start go north 4 squares. Where are you now?

2. From there, go north east 1 square. Where are you now?

3. From there, go south 2 squares. Where are you now?

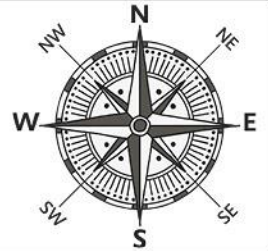
4. From there, go west 4 squares. Where are you now?

5. From there, go south east 2 squares. Where are you now?

6. Start at the school. How do you get to the fair?

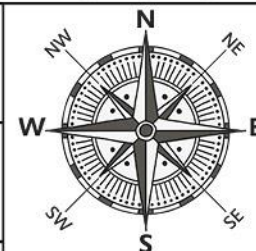

7. Direct someone from the fair to the hospital.

8. Write directions from somewhere on the map to another place.



Compass Directions

I can use the eight compass points to describe routes on a map.



1. From the start go north 4 squares and west 2 squares.
Where are you now?

2. From there, go north east 1 square and east 2 squares.
Where are you now?

3. From there, go south 2 squares and south east 2 squares.
Where are you now?

4. From there, go west 4 squares and south 1 square. Where are you now?


5. From there, go north west 1 square and west 1 square. Where are you now?

6. Start at the supermarket. How do you get to the church?

7. Direct someone from the pool to the park.

8. Write directions from somewhere on the map to another place.

Compass Directions



Describe the directions you would go throughout this journey:

Start to the dentist:

Dentist to the cafe:

Cafe to the mosque:

Mosque to the post box:

Post box to the park:

Park to the toy shop:

Toy shop to the airport:

Airport to the beach:

Beach to the start:



Draw diagrams to show how you found out the answers to these questions:



1. Swindon is west of London. Portsmouth is south of Swindon.
What direction is Portsmouth from London?

2. Lincoln is east of Chester. Blackpool is north of Chester.
What direction is Blackpool from Lincoln?

3. Sheffield is south of Leeds. Harrogate is north of Sheffield.
What direction is Harrogate from Leeds?

4. Cardiff is west of London. London is east of Bristol.
What direction is Cardiff from Bristol?

5. Leeds is south of Newcastle. Hull is east of Leeds.
What direction is Hull from Newcastle?