

Recall and use division facts for the 2 times table

- 1** Simone cooks **4** sausage rolls. Simone and her brother share them equally. How many sausage rolls do they eat each?

- 2** There are **6** chocolate cakes. How many people can have **2** cakes each?

- 3** In the music box, there are **10** instruments. Mrs Roberts gives each child **2** instruments. How many children have instruments?

- 4** Mrs Merry, the baker, puts **2** iced flowers on each cake. She uses **16** iced flowers. How many cakes has she baked?

- 5** Mr King has **2** sons. He buys **18** football cards to share equally between his sons. How many cards do they get each?

- 6** Hamza has **22** stickers. He shares them equally between himself and his best friend, Tyler. How many stickers do they have each?

Recall and use multiplication and division facts for the 2, 5 and 10 times tables

- 1** Mr Knight makes **5** car trips every day. How many does he make in **2** days?

- 2** Mum bought **12** packs of pork pies. There are **2** pies in a pack. How many pies did mum buy?

- 3** If **30** children are divided into **three** teams, how many children are in each team?


- 4** Theo has **40** DVDs. He divides them into **5** equal piles. How many DVDs are in each pile?

- 5** Zoya saves **70** pounds for her holiday to Spain. She divides the money equally between the **10** days she is there. How much money does she have for each day?

- 6** Connor thinks of a number and multiplies it by **2**. The answer is **24**. What was the number he thought of?

Solve multiplication and division problems in context

- 1 5 friends shared the cars evenly.



How many cars did they each get?

- 2 Write the missing numbers to make 2 pizzas

Ingredients for 1 pizza

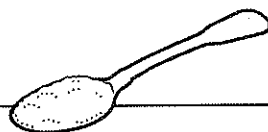

4 cups of flour

2 teaspoons of sugar

3 cups of water

6 dessert spoons of cheese

1 tomato



Ingredients for 2 pizzas


cups of flour

teaspoons of sugar


cups of water

dessert spoons of cheese

tomatoes





- 3 Lauren had some strawberries. She ate **half** of them.
Here are the strawberries Lauren had left.



How many strawberries did Lauren have to start with?

Continued overleaf

- 4 How many cakes are there altogether?


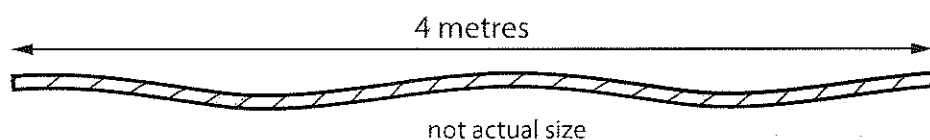


Eva spends **90p** on some cakes.

How many cakes does she buy?

- 6 Jack has **8** pieces of rope, like the one shown below.


What length of rope has he got altogether? metres



- 7 Amy plants **5** rows of flowers.

There are **9** flowers in a row.

How many flowers are there altogether?



Continued overleaf