

1

Complete the table.

Number	Roman Numerals
LX	60
LXXVI	
XCIII	

2 marks

2

Look at these numbers written in Roman numerals.

One is not written correctly.

Put a cross (X) on it.

MMCM

MCMM

MMMC

MMCC

MCCC

1 mark

3

Here are five digit cards.

1	3	4	6	9
---	---	---	---	---

Use each card **once** to complete the statements below.

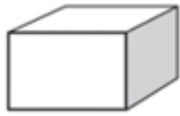
	8	>	5	
--	---	---	---	--

	0	<	2	
--	---	---	---	--

	>	7
--	---	---

2 marks

4



= 1000



= 100

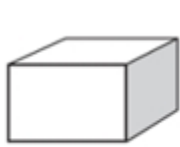


= 10

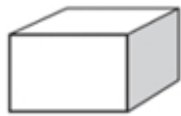
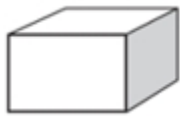


= 1

Write the value of each diagram.



=



=







2 marks

5

Ancient Egyptians

The ancient Egyptians used pictures to show numbers.

The table gives some of these pictures.

Number	Picture
one	
ten	
one hundred	
one thousand	

Write **in figures** the number that each picture below is showing.

The first one is done for you.




..... 12.....





1 mark





1 mark