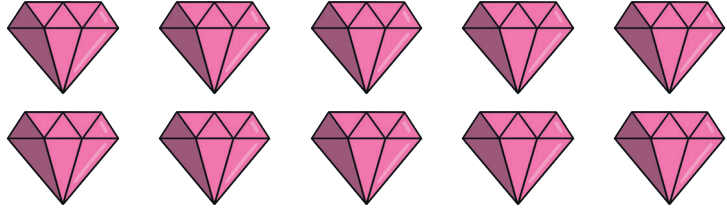


Gems Grouping Activity

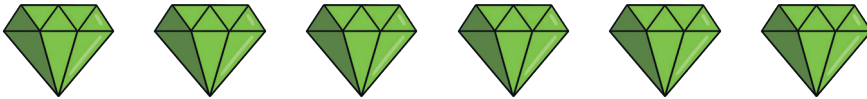
The merpeople have collected some gemstones. They want to put them into equal groups. Can you help?

Draw a circle around each group of 2.



I have equal groups.

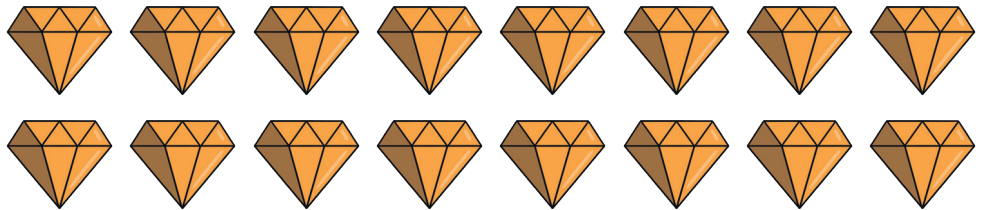
Draw a circle around each group of 3.



I have equal groups.




Draw a circle around each group of 4.



I have equal groups.

Draw a circle around each group of 5.



I have equal groups.

